
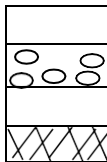
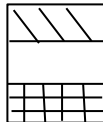







MONDAY	TUESDAY	WEDNESDAY	THURSDAY	FRIDAY																		
	Return your completed calendars by August 19th for a fun surprise!																					
3 School starts on August 14. How many days until school starts? Don't forget to count weekends!	4 How many ways can you make 28¢ using pennies, nickels, dimes, and quarters?	5 Measure your height in inches and weigh yourself in pounds. Record the results in your notebook.	6 Get on Reflex Math for 20 minutes. <a href="http://www.reflexmath.com">www.reflexmath.com</a> <u>or</u> ask your parents to download the app!	7 Write your phone number. Add the digits. Is the sum of the digits more or less than 20? Try your friend's phone number. Whose number has the larger sum?																		
10 Count out 24 pennies. Put them in 3 equal groups. How many are in each group? Now try it with 18 pennies. Is your answer the same?	11 Add across and subtract down to complete each square. Find the number that belongs in each circle. <div><table><tr><td>5</td><td>8</td><td>○</td></tr><tr><td>2</td><td>3</td><td>○</td></tr><tr><td>○</td><td>○</td><td>○</td></tr></table><table><tr><td>9</td><td>8</td><td>○</td></tr><tr><td>4</td><td>3</td><td>○</td></tr><tr><td>○</td><td>○</td><td>○</td></tr></table></div>	5	8	○	2	3	○	○	○	○	9	8	○	4	3	○	○	○	○	12 Write as many problems as you can that have an answer of 15. $7 + 8 = 15$ $25 - 10 = 15$ $1 + 2 + 3 + 4 + 5 = 15$	13 Get on Reflex Math for 20 minutes.  (Ask a grown up to save a grocery receipt to use later.)	14 Estimate how wide your kitchen table is in inches. Record the estimate. Measure and record the actual answer. What is the difference between your estimate and the actual measure?
5	8	○																				
2	3	○																				
○	○	○																				
9	8	○																				
4	3	○																				
○	○	○																				
17 Write the fraction for the <u>white</u> section of each figure. <div></div>	18 List things that come in pairs. If you had 12 pairs of shoes, how many shoes would you have? Draw a silly monster with 12 pairs of eyes.	19 Write how much money each of these amounts equals. 1 nickel and 4 pennies 1 dime and 3 pennies 2 dimes and 1 nickel 1 dollar and 1 dime	20 Get on Reflex Math for 20 minutes.	21 $6 + 4 + 8$ equals the same number as $9 + 9$ . Write three more number expressions for the amount $9 + 9$ .																		
24 Copy a sentence from your favorite book. Graph the different letters used in the sentence. Which letter is used most? Are there any letters not used?	25 Write the related facts for these fact families: $10, 7, 3$ $9, 2, 11$ $6, 9, 15$	26 Find foods that are in the shape of circles, triangles, squares and rectangles. List the foods next to their shape.	27 Get on Reflex Math for 20 minutes.	28 Write the expanded form of the following numbers: $438$ $509$ $680$ $907$																		

July 2019

Entering 2nd Grade



Summer Math Fun

MONDAY	TUESDAY	WEDNESDAY	THURSDAY	FRIDAY
<p>1 Write the fraction that tells how much of this trapezoid is white.</p> 	<p>3 Write the number that is 2 fewer than 11; 2 fewer than 15; 2 fewer than 13; 2 fewer than 17.</p>	<p>3 Get on Reflex Math for 20 minutes.</p> 	<p>4 Happy 4<sup>th</sup> of July! Count all of the American flags you see today.</p>	<p>5 Write the related facts for these fact families: 6,9,15    5,9,14    7,5,12 (Ask someone to save an empty egg carton for you to use in August.)</p>
<p>8 What time is it on this clock?</p> 	<p>9 Use a grocery receipt your mom saved for you. Circle the most expensive item in red. Circle the least expensive item in blue. Find their sum and difference.</p>	<p>10 Find the patterns. 1, 3, 5, 7, 9, _____ 2, 6, 10, 14, _____ 28, 23, 18, 13, _____</p>	<p>11 Get on Reflex Math for 20 minutes.</p>	<p>12 Draw these items: How many wheels in all?</p> <div style="display: flex; align-items: center;"> <div style="border: 1px solid black; padding: 5px; margin-right: 10px;"> <p>3 motorcycles 5 cars 7 tricycles</p> </div>  </div>
<p>14 Use this code: a=1, b=2, c=3, d=4, e=5, f=5, g=7, h=8, i=9, j=10 . . . Z=26. How much is your name worth? Can you find any words worth 100?</p>	<p>16 Write your address including zip code. Does your address have more even or odd numbers? Add the digits. Is your sum an even or odd number?</p>	<p>17 Write the following in your notebook. Fill in the missing numbers: ____, ____, 811, ____, ____ ____, ____, 201, ____, ____ ____, ____, 409, ____, ____ ____, ____, 690, ____, ____</p>	<p>18 Get on Reflex Math for 20 minutes.</p> <p>Ask someone to save an egg carton for you to use later</p>	<p>19 Sara saved 56 pennies. The gum she wants to buy is 82 cents. How much more does Sara need to buy the gum?</p> 
<p>22 Watch TV for one half hour. Time how long each commercial is. How many total minutes were the commercials?</p>	<p>23 Use the 4 square method to solve the word problem. (Write the question, draw a picture, write the number sentence and answer the question.) Joe has 23 apples and Cal has 17 apples. How many apples do they have in all?</p>	<p>24 Choose 3 numerals. Arrange these numerals to make as many 3 digit numbers as possible. List these numbers in order from largest to smallest.</p>	<p>25 Get on Reflex Math for 20 minutes.</p>	<p>26 Estimate how many jumping jacks you can do in a minute. Now try it :) Write the actual amount. What was the difference?</p>
<p>29 Draw a picture to show how many 25s are in 100. How many quarters (25¢) are in \$1 (100¢)?</p>	<p>30 Look for a repeating pattern on your floor or walls in the kitchen or bathroom. Draw and color it in your math journal.</p>	<p>31 Count by 10s from 4 to 104. 4, 14, 24.... Write the numbers as you say them.</p>		

August 2019

Entering 2nd Grade

Summer Math Fun

MONDAY	TUESDAY	WEDNESDAY	THURSDAY	FRIDAY
			1 Get on Reflex Math for 20 minutes.	2 Number the cups in an egg carton from 1- 12. Put 3 beans in the carton, close it and shake. Open and add the numbers of the cups where the beans fell. Write the total. Do it four times.
5 There are some girls, some chairs, and some tables in a room. There are 25 legs. Draw pictures to show different ways there could be a total of 25 legs.	6 Measure your height in inches and record. Weigh yourself in pounds and record. Look at your notebook page for June 5th. How much have you grown?	7 Use the 4 square method to solve the word problem. (Write the question, draw a picture, write the number sentence and answer the question.)  Milly had 35 party favors. She gave away 17. How many party favors does she have left?	8 Get on Reflex Math for 20 minutes.	9 Count out 15 pennies. Put them in 3 equal groups. How many are in each group? Now try it with 21 pennies. Is your answer the same?
12 Count how many math activities you did this summer. Write the number in your notebook. What was your favorite activity?	13 Put your first and last name on the front of your notebook. Put 2nd Grade on the front of your notebook. Take the notebook to your teacher tomorrow!	14 First day of school! 		
	Great work! You are ready for 2nd Grade now! Be sure to turn your calendar in by August 19th.			